


L.O. We are learning to take away


Write the answers in the circles. Then write the number sentence on the line below.




-

2

=






-

4

=







-

3

=






-

5

=







-

1



=





L.O. We are learning to take away





$$- \quad 6 \quad =$$





$$- \quad 4 \quad =$$




$$- \quad 9 \quad =$$



$$- \quad 7 \quad =$$



$$- \quad 5 \quad =$$



Can you make your own subtraction sentence? Draw little dinosaurs first!

$$- \quad =$$

