


L.O. We are learning to take away



Write the answers in the circles. Then write the number sentence on the line below.



-

4



=



-

1



=



-

6



=



-

7


=



-

10

=



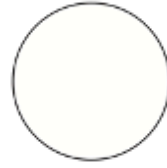
L.O. We are learning to take away



-

7


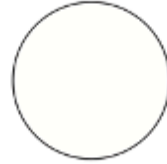
=



-

8


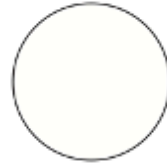
=



-

2

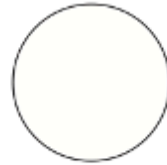
=



-

5

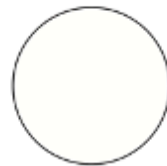
=



-

9

=



Can you make your own subtraction sentence? Draw little dinosaurs first!

-

=

